



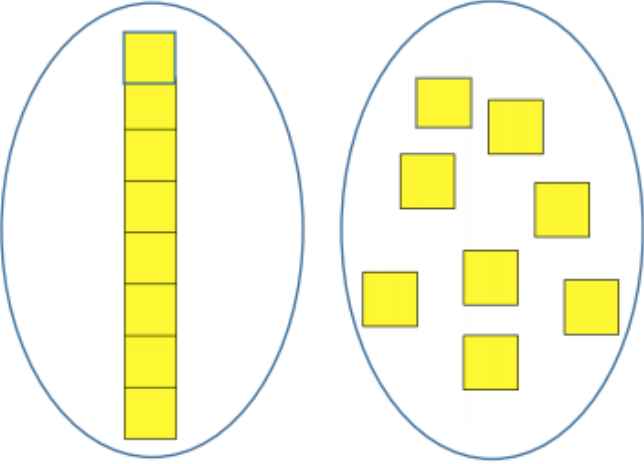
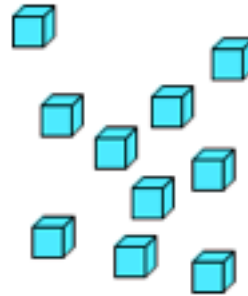
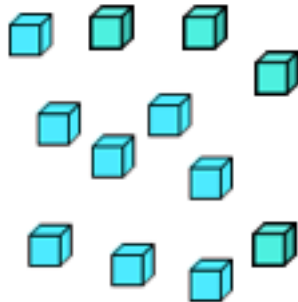


# Follow Up Screener 'B'


<p>1. How many dogs?</p> 	<p>2. A cage holds 2 hamsters. </p> <p>Count the hamsters in these cages:</p> 
<p>3. What number is shown here?</p> 	<p>4. Are these two sets the same number?</p> 

5. Draw 13 circles.

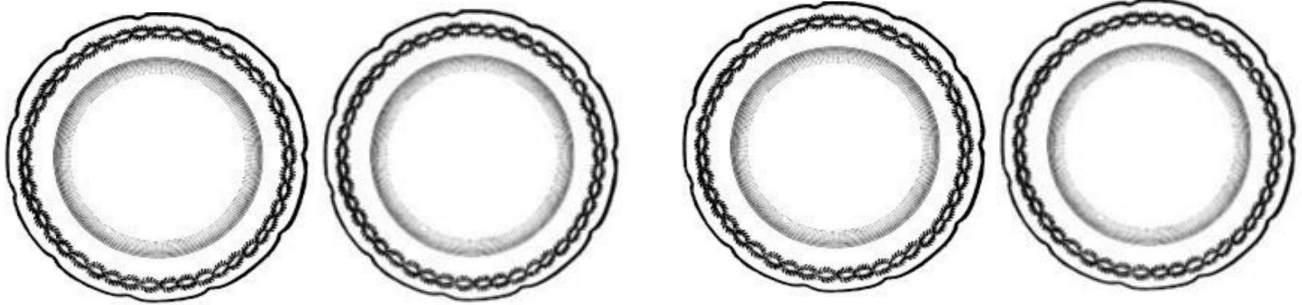
6. Circle the set that has more blocks.



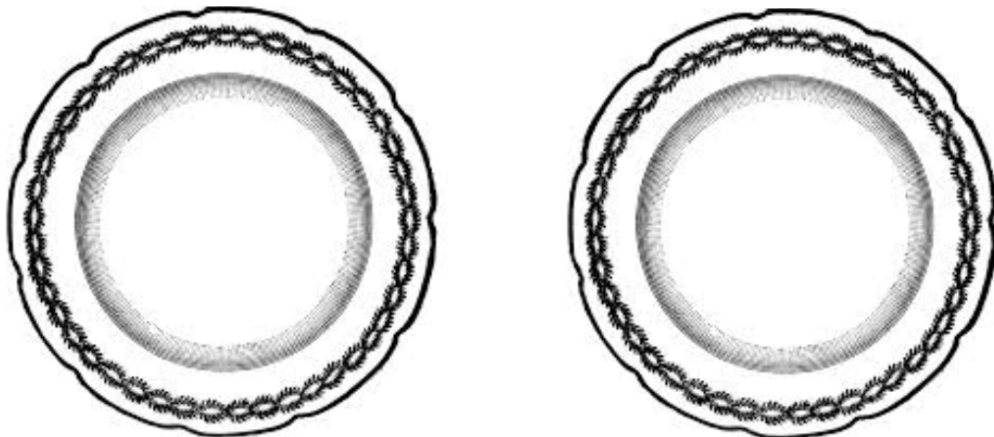
7. Circle the set that has fewer than 4.



8. There are 8 cookies. Share them equally on the four plates by drawing cookies on the plates:



9. There are 8 cookies. Share them equally on the two plates by drawing cookies on the plates:



10. Circle the number that is three more than 10.

14 11 10 13 12

11. The cookie jar has 7 cookies in it. There are 4 more cookies beside the jar. How many cookies are there altogether?



12. Solve:

$$6 + 3 =$$

13. Solve:

$$7 + 9 =$$

14. Solve:

$$9 - 4 =$$

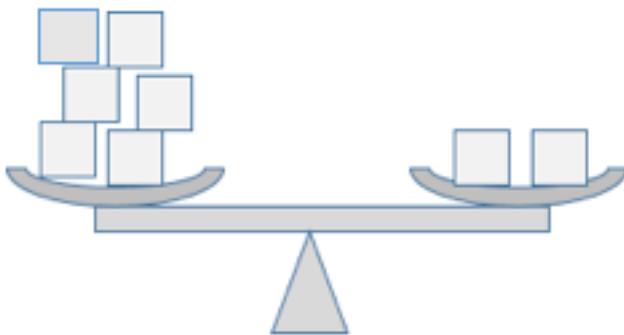
15. Solve:

$$16 - 9 =$$

16. Solve:

$$8 - 0 =$$

17. Draw blocks to make this scale balance:



18. Complete the pattern.



\_\_\_\_\_